


Fontys Academy of Music and Performing Arts

Bachelor's Degree Programme - Entrance Examination Ear Training and Theory - Practice Version

Melodic Dictation Major:

Track 1

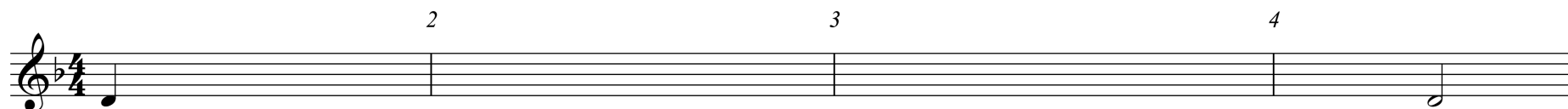
- At first, you will hear the entire dictation once
- After 20 seconds you hear bar 1 and 2 (and the first note of bar 3) three times, each time with a break of 30 seconds
- You will then hear bar 3 and 4 three times
- Finally, you hear the entire dictation one more time



Melodic Dictation Minor:

Track 2

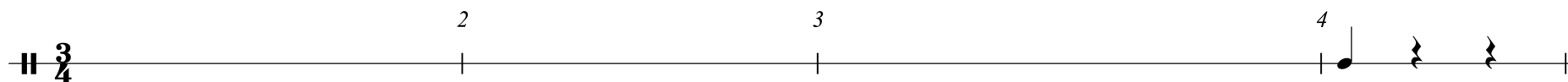
Same instructions as **Track 1**



Rhythmic Dictation 3/4

Track 3

- At first, you will hear bar 1 and the first note of bar 2 three times, with 30 seconds in between
- Then, bar 2 and the first note of bar 3 three times, with 30 seconds in between
- Now, bar 3 and the first note of bar 4 three times, with 30 seconds in between
- Finally, you hear the entire dictation once more



Rhythmic Dictation 6/8

Track 4

Same instructions as **Track 3**



Intervals:

Track 5

You will hear 5 intervals: each interval is played 3 times (with a break of 4 seconds in between): the first time broken, the second time unbroken and finally broken again.

1) _____ 2) _____ 3) _____ 4) _____ 5) _____

Track 6

Triads:


The same with 5 triads: choose from major, minor, augmented and diminished, in root position, first or second inversion:

1) _____ 2) _____ 3) _____ 4) _____ 5) _____


Basic Theory:

• Please fill in the correct accidentals of each key:


Ab Major




E minor




F dorian



Gb Major




C# Minor




• Next, fill in the correct notes of each scale, ascending and descending:


B Minor Melodic




Db Major




Eb Mixolydian



G# Harmonic




D Chromatic



• Now, fill in the correct interval:

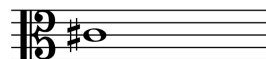
Minor 3rd above



Perfect 5th below



Major 2nd below



Diminished 7th above




Augmented 6th above




• Finally, write the correct name of each interval....:




1) _____




2) _____



3) _____




4) _____



5) _____

• ... and triad:



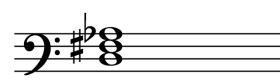
1) _____




2) _____



3) _____



4) _____



5) _____